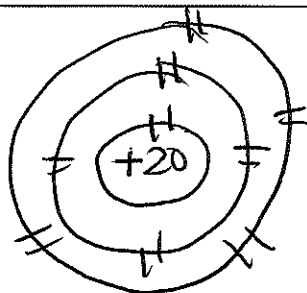


Topic Reminder Q3
Modeling Atoms
#2-3

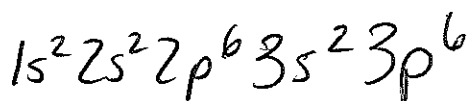


For the atom of Ca^{2+} create:

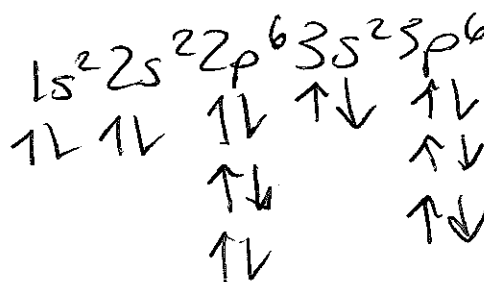
1. Bohr diagram



2. Long hand Electron configuration



3. Long hand Orbital diagram.

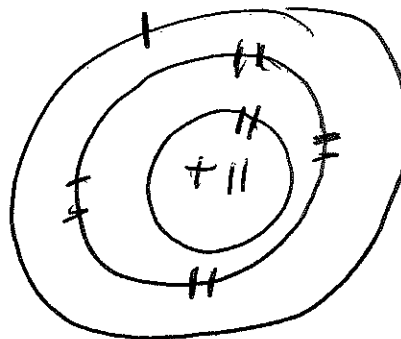



4. Create a Lewis structure for Calcium. *atom*



For the atom Na create:

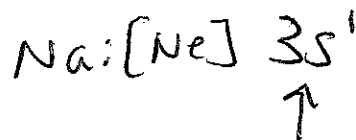
1. Bohr diagram



2. Short hand Electron configuration



3. Short hand Orbital diagram.



4. What is the most common ion for sodium?

